
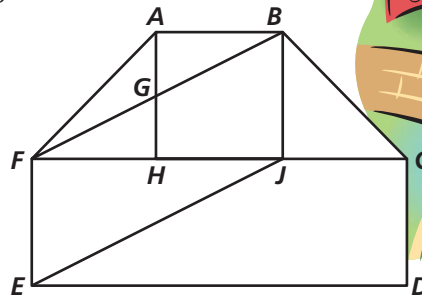


Game Time

Polygon Hide-and-Seek

Use the figure to name each polygon described.

- 1 an obtuse scalene triangle
- 2 a right isosceles triangle
- 3 a parallelogram with no right angles
- 4 a trapezoid with two congruent sides
- 5 a pentagon with three congruent sides



Poly-Cross Puzzle

You will use the names of the figures below to complete a crossword puzzle.


A copy of the crossword puzzle is available online.



go.hrw.com
Game Time Extra
 KEYWORD: MS8CA Games

ACROSS

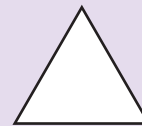
1.



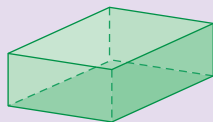
2.



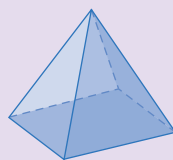
3.




4.



5.



6.

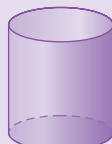


DOWN

1.



7.



8.

