
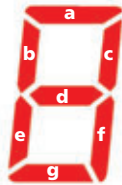


Game Time


Lighten Up

On a digital clock, up to seven segments make up each digit on the display. You can label each segment as shown below.



If each number were lit up for the same amount of time, you could find out which segment is lit the greatest percent of the time. You could also find out which segment is lit the least percent of the time.

For each number 0–9, list the letters of the segments that are used when that number is showing. The first few numbers have been done for you.



Once you have determined which segments are lit for each number, count how many times each segment is lit. What percent of the time is each segment lit?

Percent Bingo

Use the bingo cards with numbers and percents provided online. The caller has a collection of percent problems. The caller reads a problem. Then the players solve the problem, and the solution is a number or a percent. If players have the solution on their card, they mark it off. Normal bingo rules apply. You can win with a horizontal, vertical, or diagonal row.

A complete copy of the rules and game pieces is available online.



go.hrw.com
Game Time Extra
 KEYWORD: MS8CA Games