





## LESSON

**Algebra Lab Recording Sheet** p. 99**2-4****Model Equations with Variables on Both Sides****Try This**

Use algebra tiles to model and solve each equation.

MODEL		ALGEBRA
		1. $3x + 2 = 2x + 5$
		2. $5x + 12 = 2x + 3$
		3. $9x - 5 = 6x + 13$
		4. $x = -2x + 9$